



K.NBT.A.1


Name: _____

Chilly Teen Numbers

Look at the ten frame and complete the statement.




12 is one group of 10 and _____ more.




15 is one group of 10 and _____ more.




17 is one group of 10 and _____ more.




11 is one group of 10 and _____ more.




13 is one group of 10 and _____ more.



19 is one group of 10 and _____ more.



18 is one group of 10 and _____ more.



14 is one group of 10 and _____ more.