

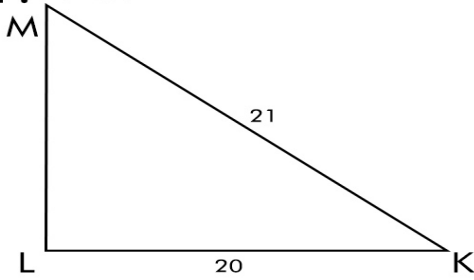
Name: _____

Date: _____

Trigonometric Ratios

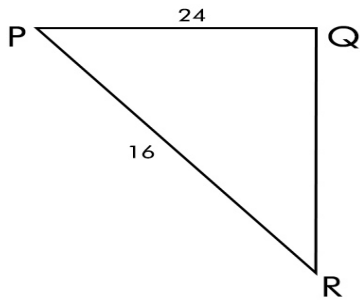
Find the exact value of six trigonometric ratio for the mentioned angle.

1. $\angle K$



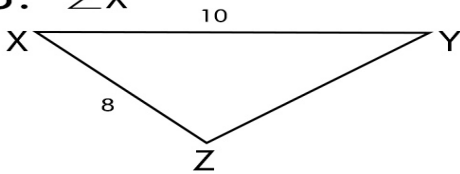
_____	_____
_____	_____
_____	_____

2. $\angle Q$



_____	_____
_____	_____
_____	_____

3. $\angle X$



_____	_____
_____	_____
_____	_____