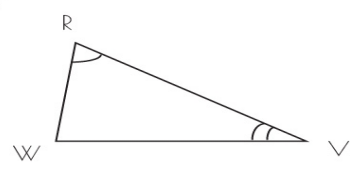
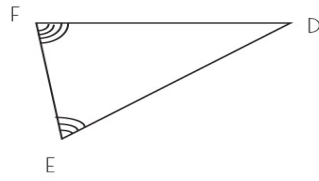
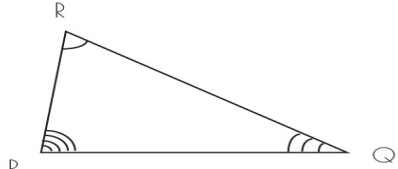
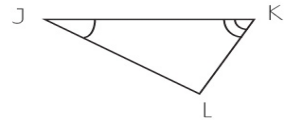
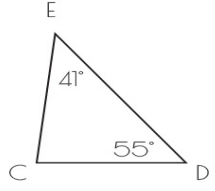
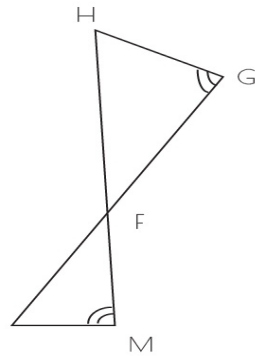
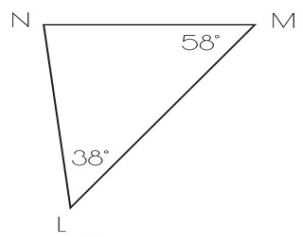


Name: _____ Date: _____

INFINITE GEOMETRY

State if the triangles in each pair are similar. If so, state how you know they are similar and complete the similarity statement.





similar; AA similarity; $\triangle FML$ not similar	not similar not similar
--	----------------------------