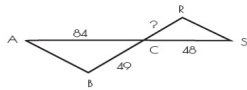
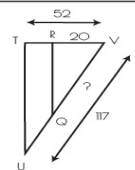


Name: \_\_\_\_\_ Date: \_\_\_\_\_

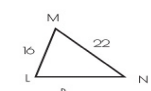
# INFINITE GEOMETRY

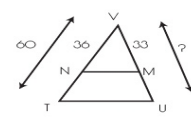
Find the missing length. The triangles in each pair are similar.



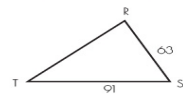


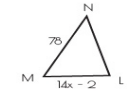

- 55
- 55
- 45
- 28






Solve for x. The triangles in each pair are similar.






- 4
- 14
- 6
- 3

