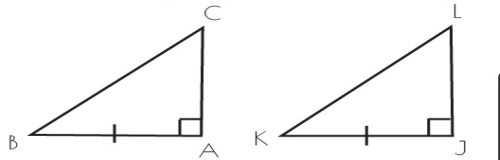
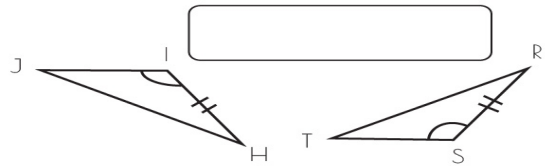
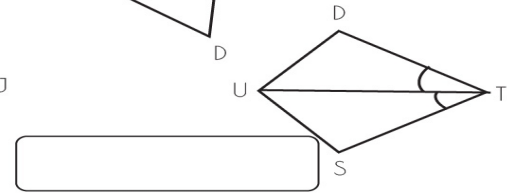
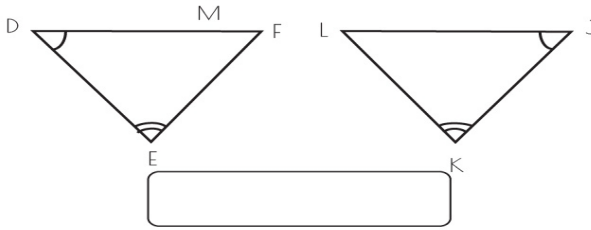
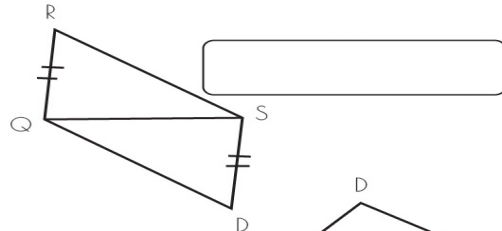
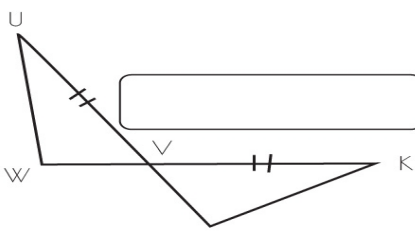
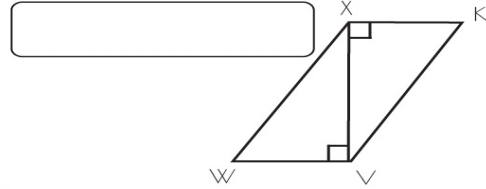
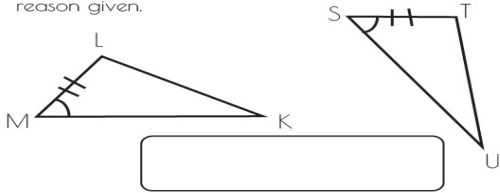


Name: \_\_\_\_\_ Date: \_\_\_\_\_

# INFINITE GEOMETRY

State what additional information is required in order to know that the triangles are congruent for the reason given.



$\angle SUT \cong \angle DUT$	$\overline{DE} \cong \overline{JK}$
$\overline{CA} \cong \overline{IJ}$	$\angle L \cong \angle T$
$\overline{VW} \cong \overline{XK}$	$\overline{IJ} \cong \overline{ST}$
$\overline{VW} \cong \overline{VM}$	$\overline{RS} \cong \overline{DQ}$