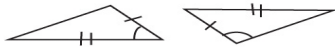


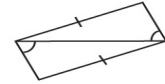
Name: _____ Date: _____

INFINITE GEOMETRY

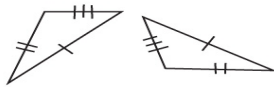
State if the two triangles are congruent. If they are, state how you know.



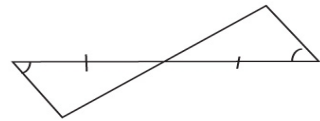
ASA



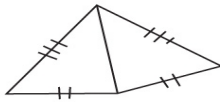
SSS



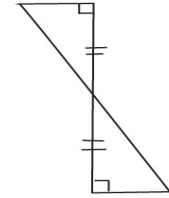
Not congruent



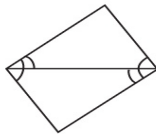
ASA



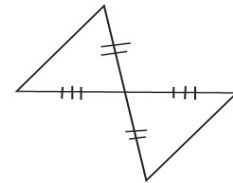
ASA



Not congruent



SSS



Not congruent



SSS

SAS

