

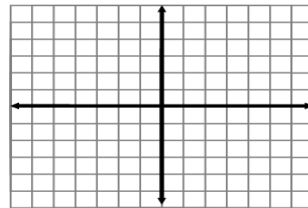
Module: Graphing
Lesson: #4 – Graphing Functions

Name _____
 Date _____ Pd. ___

Without a calculator, graph each of the following on the graph paper provided.

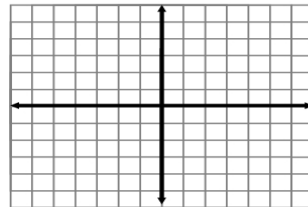
1. $f(x) = 2x - 7$

x		f(x)



2. $f(x) = -3x + 4$

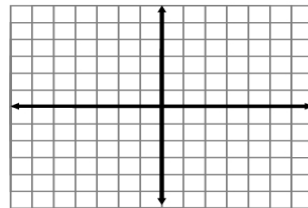
x		f(x)



Solve each equation for y and then graph each equation.

3. $6x + 7 = -14y$

x		y



4. $8x - y = 16$

