


Name: \_\_\_\_\_


### Finding Perimeter

Directions: Determine the perimeter of each shape by adding together the sides and finding the total.




8 cm  
5 cm  
5 cm  
8 cm

The perimeter of this shape is \_\_\_\_\_ sq. cm.




4 ft

The perimeter of this shape is \_\_\_\_\_ sq. ft.



3 in  
3 in  
3 in

The perimeter of this shape is \_\_\_\_\_ sq. in.



7 in  
7 in  
7 in  
7 in

The perimeter of this shape is \_\_\_\_\_ sq. in.