

Name: _____

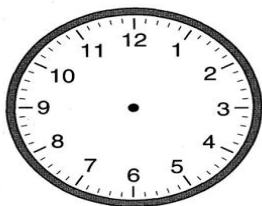
CCSS 3.MD.1 Tell and write time to the nearest minute and measure time.....

Elapsed Time

Directions: Solve the following elapsed time problems.

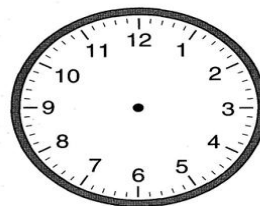
Mrs. Starkey was sent to time-out at 3:00 PM. Her time-out ended at 6:00 AM. How long was Mrs. Starkey in time-out?

Time-out started



_____ : _____

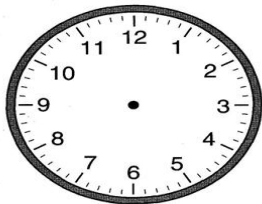
Time-out ended



_____ : _____

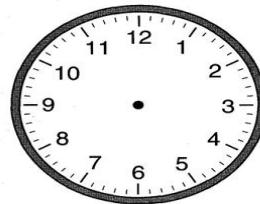
It started raining at 9:00 AM. The sun came out and it stopped raining at 1:00 PM. How long did it rain?

Time Movie Started



_____ : _____

Time Movie Ended



_____ : _____