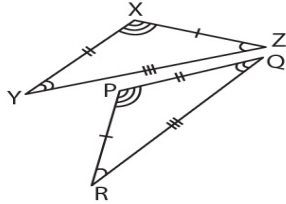


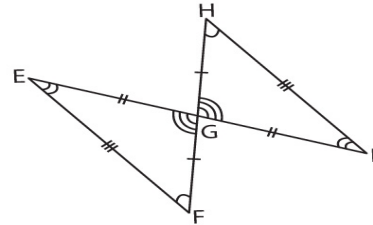
Name: _____ Date: _____

CONGRUENT TRIANGLES

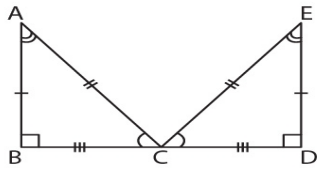
Complete each congruence statement.



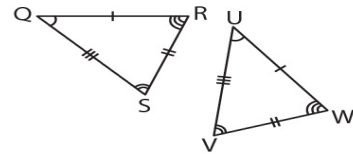
$\angle X \cong$ _____



$\overline{HI} \cong$ _____



$\overline{AB} \cong$ _____



$\angle Q \cong$ _____

$\triangle DEF \cong \triangle XYZ$

$\overline{EF} \cong$ _____

$\triangle ABC \cong \triangle FGH$

$\angle F \cong$ _____

$\triangle STU \cong \triangle XYZ$

$\overline{ST} \cong$ _____

$\triangle LMN \cong \triangle PQR$

$\angle M \cong$ _____