




Name \_\_\_\_\_


I can work to find the missing number.


| 1 |  |
|---|--|
|   |  |


| 2   |  |
|---|--|
|  |  |


| 3   |  |
|---|--|
|  |  |


| 4   |  |
|---|--|
|  |  |


| 5  |  |
|--|--|
|  |  |


| 6  |  |
|--|--|
|  |  |

| 7  |  |
|--|--|
|  |  |

| 8  |  |
|--|--|
|  |  |

| 9   |  |
|---|--|
|  |  |

| 10  |  |
|---|--|
|  |  |



How many are the  
with finding  
all together?

|  |
|--|
|  |
|--|