


Name: _____
Date: _____

Subject: Year 3 Summary
Sheet: 2D shapes

2D shapes


Name each shape and count how many sides each shape has got.



name: _____
sides: _____




name: _____
sides: _____




name: _____
sides: _____




name: _____
sides: _____




name: _____
sides: _____




name: _____
sides: _____



name: _____
sides: _____



name: _____
sides: _____



name: _____
sides: _____