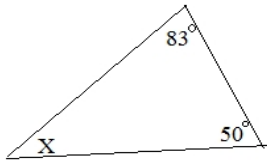


Angles Exercise

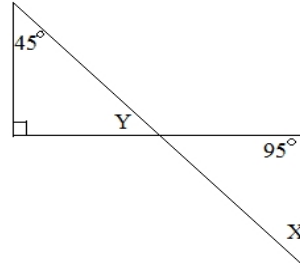
II. More Angle measures: Answer:

a)



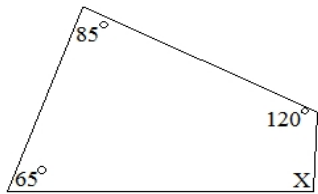
$X =$

b)



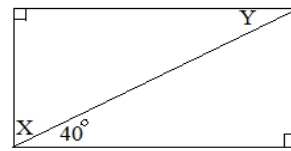
$X =$
 $Y =$

c)



$X =$

d)



$X =$
 $Y =$

III. Polygon Application

For the *regular* hexagon, find interior angle X and exterior angle Y

