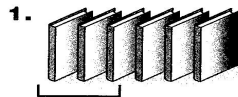
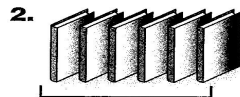


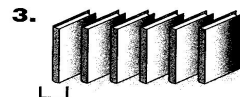
What fraction does each picture show? Shade the oval next to each correct answer. There may be more than one correct answer.



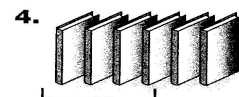
- $\frac{1}{4}$ $\frac{1}{2}$
 $\frac{2}{3}$ $\frac{6}{6}$




- $\frac{1}{4}$ $\frac{3}{6}$
 $\frac{6}{6}$ $\frac{3}{4}$



- $\frac{1}{2}$ $\frac{6}{1}$
 $\frac{1}{6}$ $\frac{6}{6}$



- $\frac{4}{6}$ $\frac{1}{4}$
 $\frac{6}{6}$ $\frac{2}{3}$



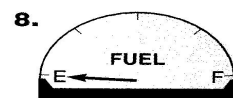
- $\frac{0}{4}$ $\frac{3}{4}$
 $\frac{1}{2}$ $\frac{1}{4}$



- $\frac{0}{4}$ $\frac{3}{4}$
 $\frac{1}{2}$ $\frac{1}{4}$



- $\frac{0}{4}$ $\frac{3}{4}$
 $\frac{1}{2}$ $\frac{1}{4}$




- $\frac{0}{4}$ $\frac{3}{4}$
 $\frac{1}{2}$ $\frac{1}{4}$


Challenge




- $\frac{1}{4}$ $\frac{1}{2}$
 $\frac{2}{12}$ $\frac{2}{3}$



- $\frac{3}{4}$ $\frac{3}{6}$
 $\frac{12}{12}$ $\frac{6}{12}$



- $\frac{3}{4}$ $\frac{12}{1}$
 $\frac{12}{12}$ $\frac{0}{12}$



- $\frac{1}{2}$ $\frac{12}{12}$
 $\frac{8}{12}$ $\frac{3}{4}$