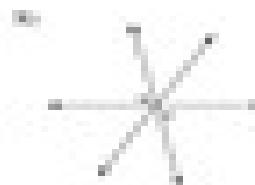




**Angle Pair Relationships**

Name the relationship: complementary, linear pair, vertical, or adjacent.



Find the measure of angle A.

