

LIVING AND NON-LIVING THINGS

NAME: _____

Directions: Classify whether the picture shows a living or non-living thing. Mark the correct answer.




Living non-living



Living non-living




Living non-living




Living non-living




Living non-living



Living non-living



Living non-living



Living non-living



Living non-living



Living non-living