
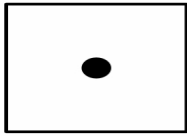


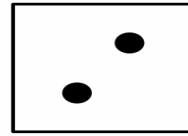

Name _____ Date _____

Dice Addition



Look at each dice below and write the number below each dice, then add the number and write the answer!





$$\underline{\quad} + \underline{\quad} = \underline{\quad}$$



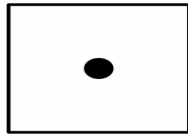

$$\underline{\quad} + \underline{\quad} = \underline{\quad}$$



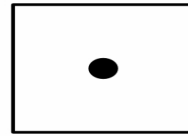

$$\underline{\quad} + \underline{\quad} = \underline{\quad}$$





$$\underline{\quad} + \underline{\quad} = \underline{\quad}$$




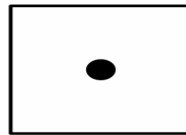
$$\underline{\quad} + \underline{\quad} = \underline{\quad}$$



$$\underline{\quad} + \underline{\quad} = \underline{\quad}$$



$$\underline{\quad} + \underline{\quad} = \underline{\quad}$$



$$\underline{\quad} + \underline{\quad} = \underline{\quad}$$