

Name : _____

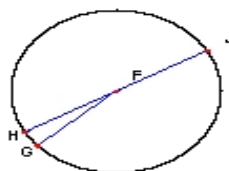
Score : _____

Teacher : _____

Date : _____

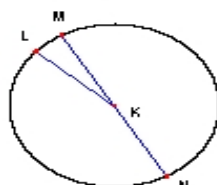
Solve the missing elements for each problem. Use 3.14 for Pi.

1)



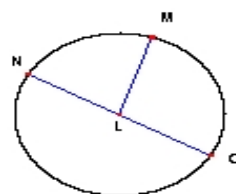
Radius: _____
 Diameter: 22 inches
 Circumference: _____
 Area: _____

2)



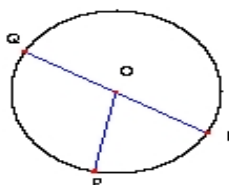
Radius: _____
 Diameter: 6 ft
 Circumference: _____
 Area: _____

3)



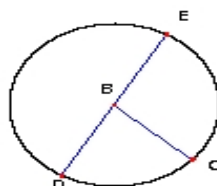
Radius: 19 yards
 Diameter: _____
 Circumference: _____
 Area: _____

4)



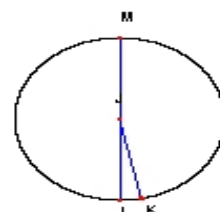
Radius: _____
 Diameter: 24 cm
 Circumference: _____
 Area: _____

5)



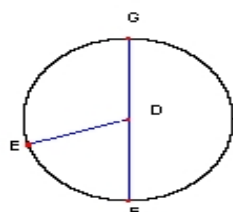
Radius: _____
 Diameter: 4 mm
 Circumference: _____
 Area: _____

6)



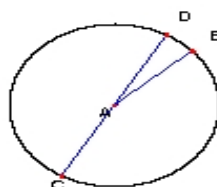
Radius: _____
 Diameter: 16 inches
 Circumference: _____
 Area: _____

7)



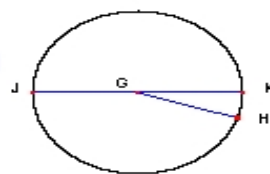
Radius: 10 ft
 Diameter: _____
 Circumference: _____
 Area: _____

8)



Radius: 20 yards
 Diameter: _____
 Circumference: _____
 Area: _____

9)



Radius: 5 cm
 Diameter: _____
 Circumference: _____
 Area: _____