







NAME _____

HEART, HEART WHAT'S THE MISSING PART?

Directions: Look at the number above the domino. How many more pips are needed on the domino to get to that number? Draw and show how and show.



Write or draw to show:



and



is

