
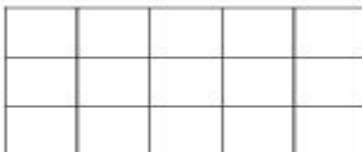



Name: _____

Wednesday

Math Practice: Partition Rectangles (2.G.2)

Skill Based Task

<p>Partition the rectangle into 4 rows and 4 columns. Record the total number of squares.</p>  <p>Number of squares: _____</p>	<p>What is the area of the figure?</p>  <p>Area : _____ units</p>	<p>What is the area of the figure?</p>  <p>Area : _____ units</p>
---	--	---

Problem Task

<p>Aunt Maple is making a quilt. Her quilt is partitioned into 4 rows and 6 columns of squares. How many quilt squares will she need to make her quilt? Explain your answer below.</p> <p>_____ quilt squares</p>	<p>Mrs. Gent is making a brick patio. She wants her patio to be in the shape of a rectangle. She wants 7 rows and 4 columns of bricks. How many bricks will she need? Explain your answer below.</p> <p>_____ bricks</p>
---	--