










Name _____ Date / /

AREA OF A RECTANGLE PRACTICE

Directions: Find the area of the rectangles below.



<p>1</p>  <p>_____ square units</p>	<p>2</p>  <p>_____ square units</p>	<p>3</p>  <p>_____ square units</p>	<p>4</p>  <p>_____ square units</p>
<p>5</p>  <p>_____ square units</p>	<p>6</p>  <p>_____ square units</p>	<p>7</p>  <p>_____ square units</p>	<p>8</p>  <p>_____ square units</p>