


Name _____

Legs Addition

Count the number of legs, write underneath and complete the addition sum.



+

=




+

=




+

=



+

=




+

=



+

=



+

=



+

=
