

**Classifying Triangles**

Classify each triangle by each angles and sides. Base your decision on the actual lengths of the sides and the measures of the angles.

1)



2)



3)



4)



5)

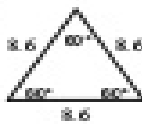


6)

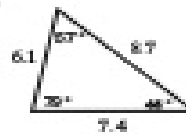


Classify each triangle by each angles and sides.

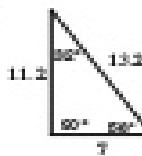
7)



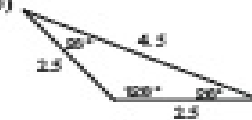
8)



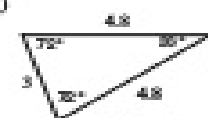
9)



10)



11)



12)

