
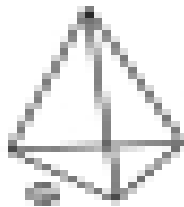
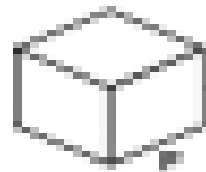

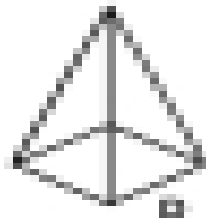
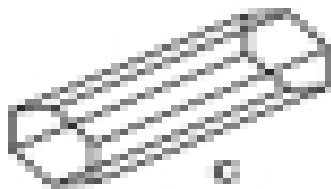
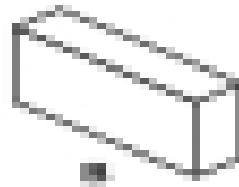
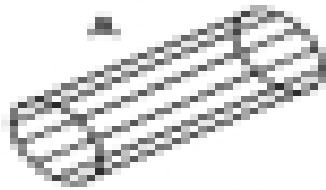


3.1.1. Classifying Solids and Nets 1.8 Steps 2/21
3.1.1.1. Classifying Solids

Can you identify each of these 3-D shapes? Use the shape to the name.



Cube

Cuboid

Square based
Pyramid

Cone

Cylinder

Tetrahedron

Octagonal Prism

Hexagonal Prism