


Name: \_\_\_\_\_  
Date: \_\_\_\_\_

Subject: Year 3 Summary  
Sheet: 2D shapes

### 2D shapes


Name each shape and count how many sides each shape has got.



name: \_\_\_\_\_  
sides: \_\_\_\_\_




name: \_\_\_\_\_  
sides: \_\_\_\_\_




name: \_\_\_\_\_  
sides: \_\_\_\_\_




name: \_\_\_\_\_  
sides: \_\_\_\_\_




name: \_\_\_\_\_  
sides: \_\_\_\_\_



name: \_\_\_\_\_  
sides: \_\_\_\_\_



name: \_\_\_\_\_  
sides: \_\_\_\_\_



name: \_\_\_\_\_  
sides: \_\_\_\_\_



name: \_\_\_\_\_  
sides: \_\_\_\_\_