



















Name: \_\_\_\_\_

## Domino Missing Addends

Directions: Find a domino that that solves each sum. Draw the missing dots. Don't use the same domino twice.

+						
	8	15	7	9	11	6
+						
	6	4	20	1	3	8
+						
	5	5	3	8	1	7