


Name: _____


Addition up to 20

Add the numbers, and write the answer in the box.


1.


$$\begin{array}{r} 12 \\ + 5 \\ \hline \square \end{array}$$

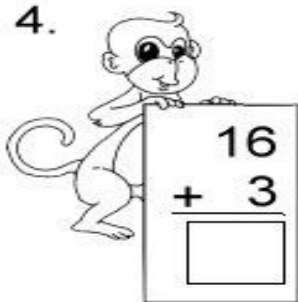
2.


$$\begin{array}{r} 7 \\ + 8 \\ \hline \square \end{array}$$


3.


$$\begin{array}{r} 14 \\ + 2 \\ \hline \square \end{array}$$

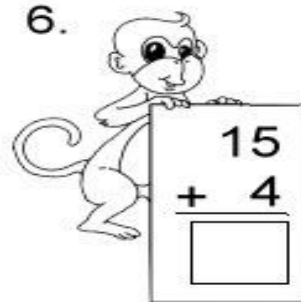
4.


$$\begin{array}{r} 16 \\ + 3 \\ \hline \square \end{array}$$

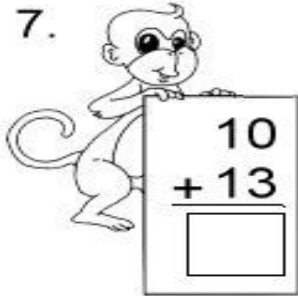
5.


$$\begin{array}{r} 9 \\ + 7 \\ \hline \square \end{array}$$

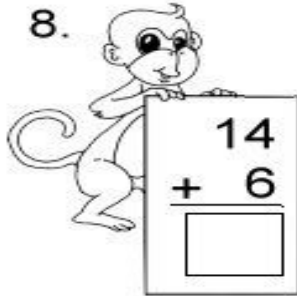
6.


$$\begin{array}{r} 15 \\ + 4 \\ \hline \square \end{array}$$

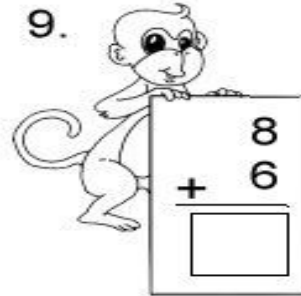
7.


$$\begin{array}{r} 10 \\ + 13 \\ \hline \square \end{array}$$

8.


$$\begin{array}{r} 14 \\ + 6 \\ \hline \square \end{array}$$

9.


$$\begin{array}{r} 8 \\ + 6 \\ \hline \square \end{array}$$