




Name: \_\_\_\_\_

Can you tell the time to the nearest 5 minutes?  
Worksheet 2

1




12:00

2



3




11:15

4



5



6:45

6



7




8



9



10



11



12

