

# TELLING TIME TO THE NEAREST 5 MINUTES

NAME: \_\_\_\_\_

DATE: \_\_\_\_\_

DIRECTIONS: WRITE THE TIME IN DIGITAL FORM UNDERNEATH EACH CLOCK

1.



2.



3.



4.



5.



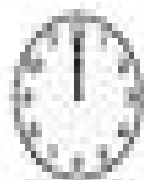
6.




7.



8.




9.




10.




11.




12.



13.




14.




15.



16.



17.



18.

