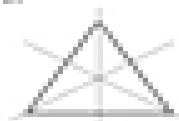





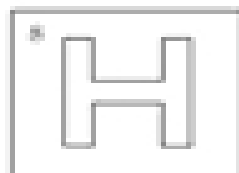
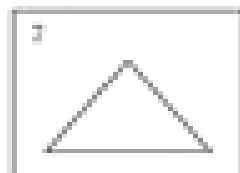

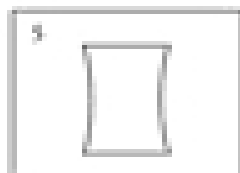
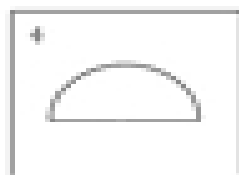
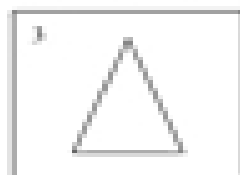




Symmetry

Draw the lines of symmetry on each shape.



Draw the lines of symmetry on each shape. Some shapes may have no line of symmetry, and some shapes may have more than one line.



Half of each shape has been drawn as well as the line of symmetry (dotted line). Draw the other half of each shape.

