

Name : _____

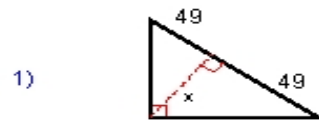
Score : _____

Teacher : _____

Date : _____

Similar Right Triangles

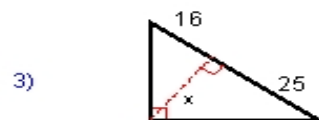
Find x . Leave your answer in the simplest radical form.



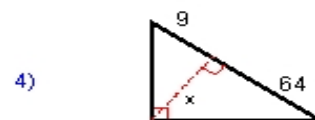
$x = \underline{\hspace{2cm}}$



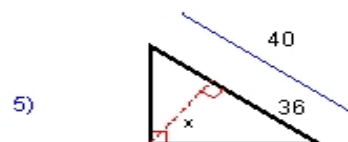
$x = \underline{\hspace{2cm}}$



$x = \underline{\hspace{2cm}}$



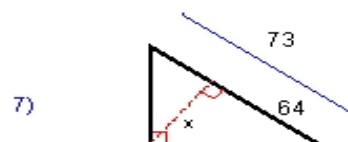
$x = \underline{\hspace{2cm}}$



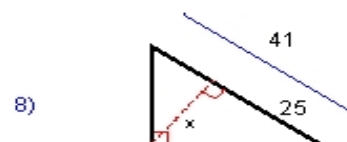
$x = \underline{\hspace{2cm}}$



$x = \underline{\hspace{2cm}}$



$x = \underline{\hspace{2cm}}$



$x = \underline{\hspace{2cm}}$

