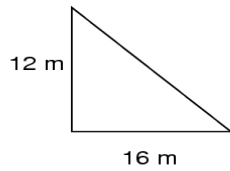


Finding Area and Volume Using Scale Factor

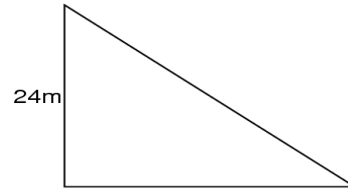
Given the 2 shapes, what is the scale factor and the area of both?

1.



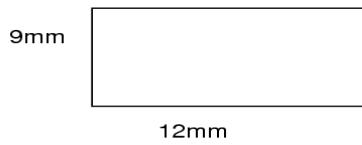
Area: _____

Scale Factor _____



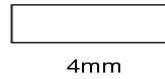
Area: _____

2.



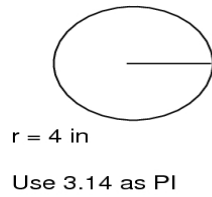
Area: _____

Scale Factor _____



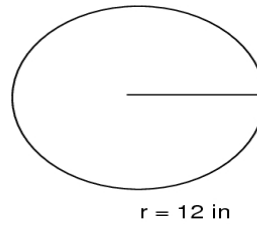
Area: _____

3.



Area: _____

Scale Factor _____



Area: _____