

**APPENDIX A**  
**WORKSHEET 1**  
**PLANE FIGURES (Level 1)**

- OBJECTIVES:** You should be able to:
- (1) Describe properties of plane figures
  - (2) Define a polygon
  - (3) Compare polygons
  - (4) Find the sum of the angles of various polygons

**ACTIVITIES**

1. Describe the properties of the following shapes (in your own words).

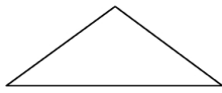


Fig. 3.1

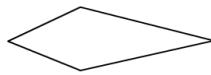


Fig. 3.3

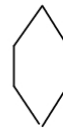
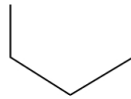
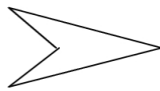


Fig.3.5



Fig. 3.6

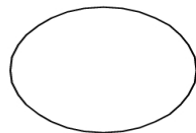


Fig. 3.7

Fig.

3.8