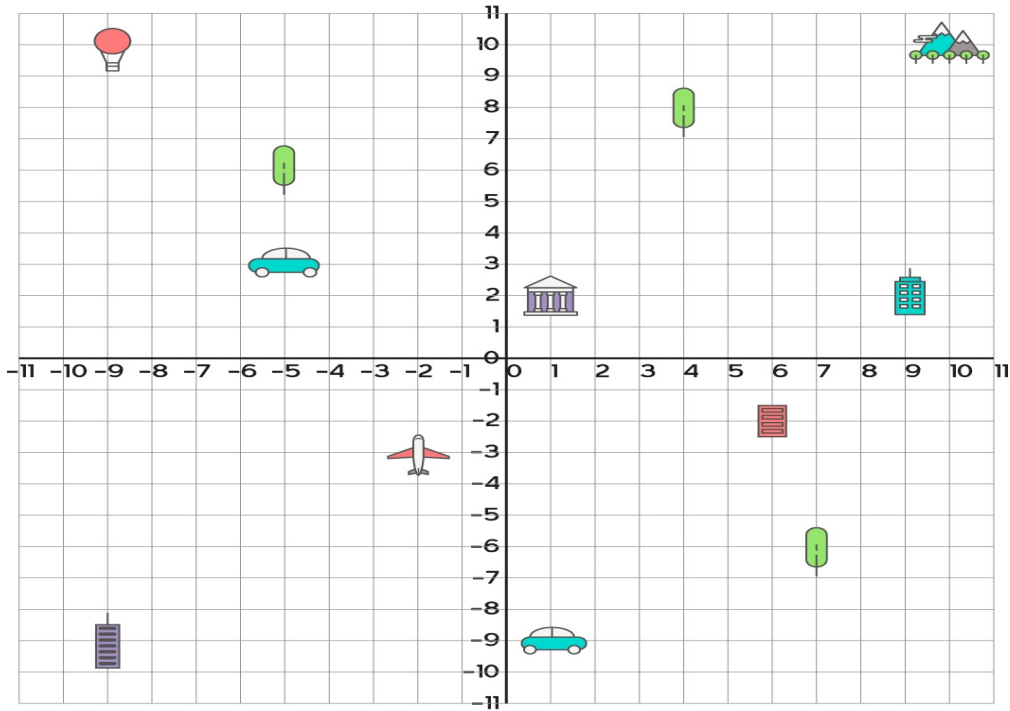











Name: \_\_\_\_\_ Date: \_\_\_\_\_

# Map Grid

Worksheets

Write the coordinates.



- |   |                   |   |       |   |       |
|---|-------------------|---|-------|---|-------|
|  | ( . )             |  | ( . ) |  | ( . ) |
|  | ( . )             |  | ( . ) |  | ( . ) |
|  | ( . ) ( . ) ( . ) |   |       |  | ( . ) |
|  | ( . ) ( . )       |   |       |   |       |