

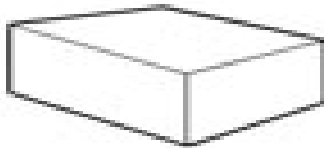




# Solids and Polygons

Name: \_\_\_\_\_

Look at the shapes below. Write the correct names from the word bank underneath each picture.



pentagon • cylinder • cube • hexagon • octagon  
rectangular prism • triangle • trapezoid • parallelogram