


Name _____

Date _____

Sort It Out


Neil is organizing his toolbox. Help him sort the figures correctly. Write the letter of each figure in the box that describes it. Figures may be used more than once.




triangle



rectangle



cube



sphere



octagon



cone



square pyramid



cylinder



hexagon



trapezoid



rectangular prism



square



pentagon

Two-dimensional figures

Three-dimensional figures

Solids with four or more faces

Plane figures with more than one pair of parallel sides

Solid figures with flat faces

Solid figures with a curved surface
