

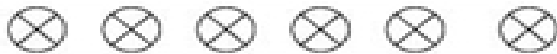




Class: KG-1

Subject: Mathematics

Name of the student:

1. Write numbers in sequence 1- 30:

2. Count the objects and write the correct number in the box :

3. Draw 4 balls

--

4. Draw 9 balls

--

