

Name : \_\_\_\_\_

Score : \_\_\_\_\_

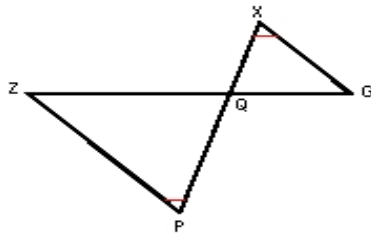
Teacher : \_\_\_\_\_

Date : \_\_\_\_\_

### Similar Right Triangles

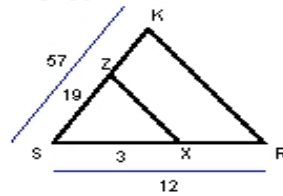
State if each triangle pair is similar. If so, state the similarity type and name the similar triangle.

1)



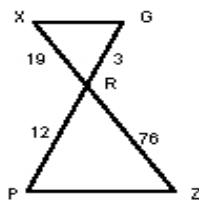
$\Delta GQX \sim$  \_\_\_\_\_

2)



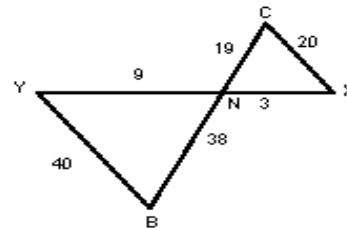
$\Delta RSK \sim$  \_\_\_\_\_

3)



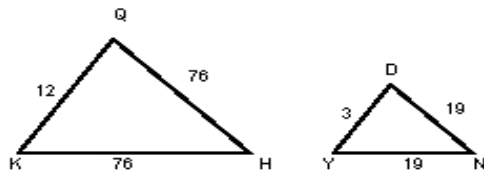
$\Delta GRX \sim$  \_\_\_\_\_

4)



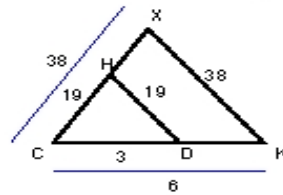
$\Delta XNC \sim$  \_\_\_\_\_

5)



$\Delta QKH \sim$  \_\_\_\_\_

6)



$\Delta KCX \sim$  \_\_\_\_\_

