


Comparing Fractions

Shade and use >, <, or = to compare the fractions.

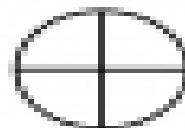


$$\frac{1}{2}$$


>



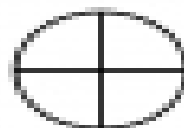
$$\frac{1}{3}$$



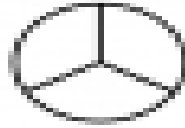
$$\frac{2}{4}$$



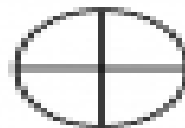
$$\frac{3}{4}$$



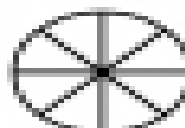
$$\frac{2}{4}$$



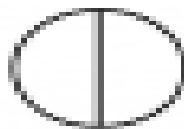
$$\frac{2}{3}$$



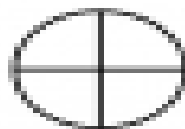
$$\frac{2}{4}$$



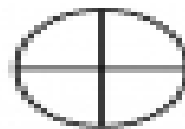
$$\frac{4}{8}$$



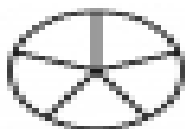
$$\frac{1}{2}$$



$$\frac{2}{4}$$



$$\frac{3}{4}$$



$$\frac{4}{5}$$