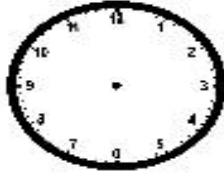


Review (3 MD 1) Draw the time on each clock to the nearest minute.



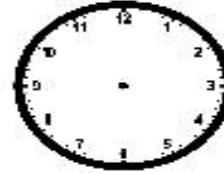
4:21



6:42




9:58



12:01

Use the number line to help you solve each problem. Write your answer in the blank.

Jane needs to read his book for 25 minutes. He started reading his book at 3:05 p.m. What time will he be finished reading?



Review (3 NBT 2) Solve. Write the number in standard form.

$$\begin{array}{r} 500 + 40 + 9 \\ 200 + 20 + 2 \end{array}$$

$$\begin{array}{r} 600 + 60 + 8 \\ 100 + 70 + 1 \end{array}$$

$$\begin{array}{r} 300 + 60 + 2 \\ 300 + 80 + 5 \end{array}$$

Standard form _____

Standard form _____

Standard form _____

Review (3 OA 8) Write an equation and find the solution.

Billy has a large collection of toy cars. He gave his best friend 24 cars. He gave his little brother 7 cars. Now Billy has 60 cars in his collection. How many cars did he start with?

Equation: _____

Answer: _____

Carrie made 74 bead necklaces. She sold 26 at a craft fair. She gave 18 to her friends. How many bead necklaces did she have left?

Equation: _____

Answer: _____