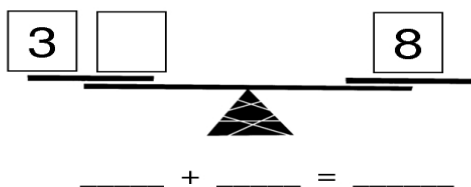


**Maths – Year 2 – Unit 2 – Day 9**  
**Send-in task**

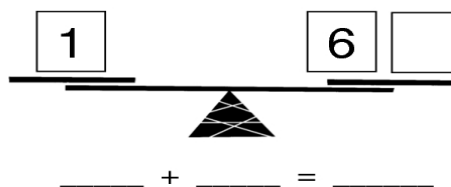
**Balancing Addition Equations**

Write the missing number to make the scales balance. Then write a matching number sentence.

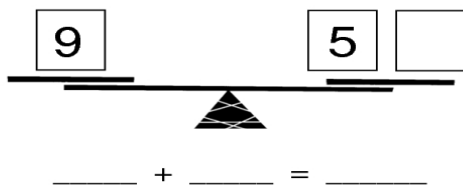
1.



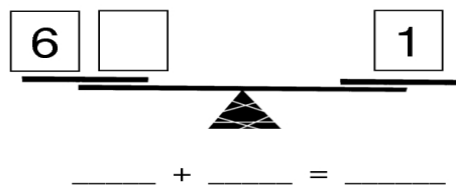
2.



3.

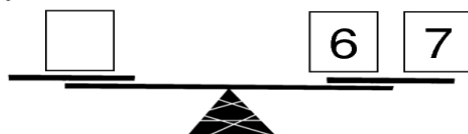


4.

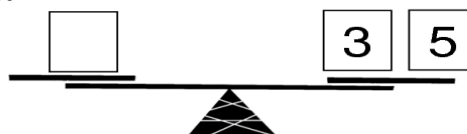


Write the missing numbers to make these true

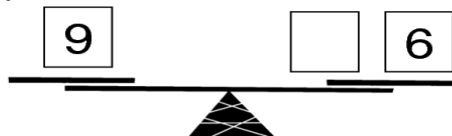
5.



6.



7.



8.

