

Name: \_\_\_\_\_


Monday

**Math Practice: Measuring Angles (4.MD.8)**  
In Whole Number Degrees

Using a protractor, measure the angles.




$\angle ABC =$  \_\_\_\_\_



$\angle DEF =$  \_\_\_\_\_




$\angle HGI =$  \_\_\_\_\_



$\angle KJL =$  \_\_\_\_\_



$\angle QPR =$  \_\_\_\_\_



$\angle STU =$  \_\_\_\_\_

Sketch each angle described using a protractor.

$\angle CDE = 45^\circ$

$\angle ABC = 115^\circ$