




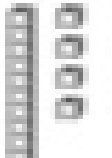


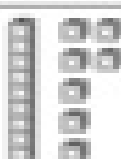

Name: _____

Place value: ones and tens to 40

Cube Counting

Count the tens and ones.
Write how many.



 1 ten 3 ones 13	 _____ tens _____ ones _____
 _____ tens _____ ones _____	 _____ tens _____ ones _____
 _____ tens _____ ones _____	 _____ tens _____ ones _____
 _____ tens _____ ones _____	 _____ tens _____ ones _____
 _____ tens _____ ones _____	 _____ tens _____ ones _____