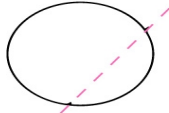


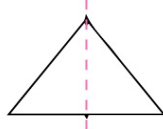
Name: _____ Date: _____

Symmetry For 4th Grade

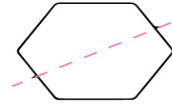
Tell whether the dotted line on each shape is a line of symmetry.



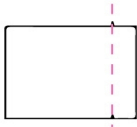
Yes No



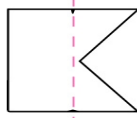
Yes No



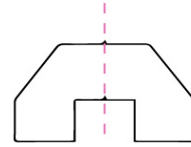
Yes No



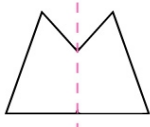
Yes No



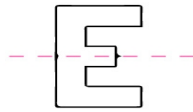
Yes No



Yes No



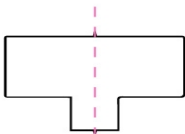
Yes No



Yes No



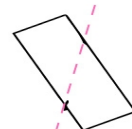
Yes No



Yes No



Yes No



Yes No