

Name : \_\_\_\_\_

Score : \_\_\_\_\_

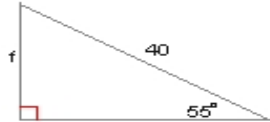
Teacher : \_\_\_\_\_

Date : \_\_\_\_\_

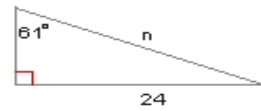
### Solving Right Triangles

Find the side indicated by a variable. Round to the nearest tenth.

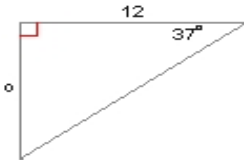
1)  $f =$  \_\_\_\_\_



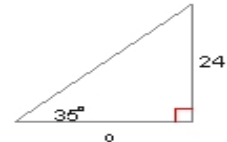
2)  $y =$  \_\_\_\_\_



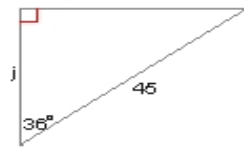
3)  $o =$  \_\_\_\_\_




4)  $o =$  \_\_\_\_\_



5)  $j =$  \_\_\_\_\_



6)  $v =$  \_\_\_\_\_



7)  $v =$  \_\_\_\_\_



8)  $f =$  \_\_\_\_\_

