

Name : _____

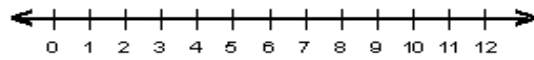
Score : _____

Teacher : _____

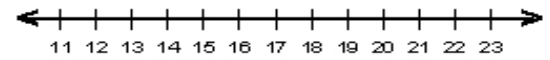
Date : _____

Solve and Graph the Inequalities

1) $8 \leq -2k - 7 + 5k$



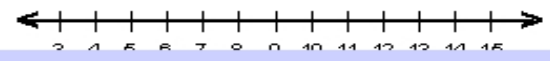
6) $6p - 11 + 2p > 117$



2) $-6r - 36 \geq 6(4 - 2r)$



7) $-6d - 82 \leq 6(5 - 3d) - 2d$



$$y = -\frac{5}{2}x - 1$$

$$y = -4$$

