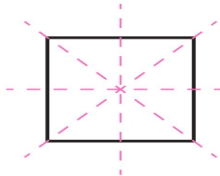
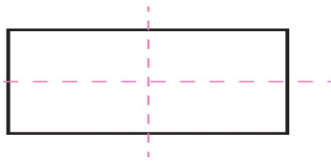


Name: _____ Date: _____

Shapes with Line of Symmetry



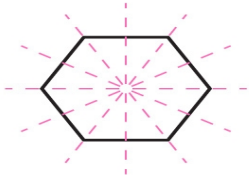
Square
4 lines of symmetry



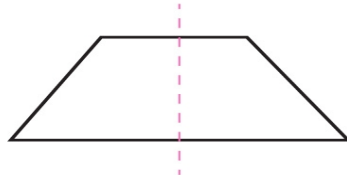
Rectangle
2 lines of symmetry



Parallelogram
No lines of symmetry



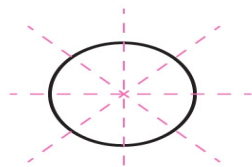
Hexagon
3 lines of symmetry



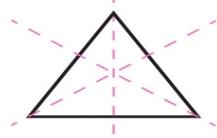
Isosceles Trapezoid
1 lines of symmetry



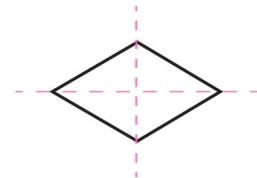
Trapezoid
No lines of symmetry



Circle
Infinite lines of symmetry



Equilateral Triangle
3 lines of symmetry



Rhombus
2 lines of symmetry