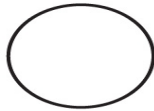


Name: _____ Date: _____

Line of Symmetry

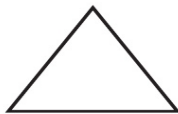
How many number of lines of symmetry from each shape?



___ lines
of symmetry




___ lines
of symmetry



___ lines
of symmetry



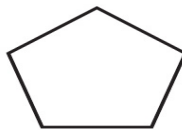
___ lines
of symmetry



___ lines
of symmetry



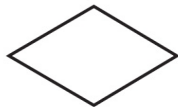
___ lines
of symmetry



___ lines
of symmetry



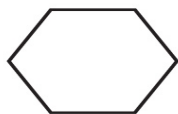
___ lines
of symmetry



___ lines
of symmetry



___ lines
of symmetry



___ lines
of symmetry



___ lines
of symmetry