

Name _____


Class _____

Date _____

One Feasted Peacock


Find the diagram that matches each description. Write the letter on the line. Hint: some pictures will be used more than once.

- _____ 1. \overleftrightarrow{AC} intersects \overleftrightarrow{BD}
- _____ 2. \overleftrightarrow{DC} is parallel to \overleftrightarrow{AB}
- _____ 3. \overleftrightarrow{AB} and \overleftrightarrow{CD} are parallel
- _____ 4. \overleftrightarrow{AB} is perpendicular to \overleftrightarrow{BC}
- _____ 5. \overleftrightarrow{AC} intersects \overleftrightarrow{BC}
- _____ 6. Point C is on ray \overrightarrow{AB}
- _____ 7. \overleftrightarrow{AB} intersects \overleftrightarrow{AC} at point A
- _____ 8. \overleftrightarrow{AB} is perpendicular to \overleftrightarrow{CD}
- _____ 9. C is the midpoint of \overleftrightarrow{BD}
- _____ 10. \overleftrightarrow{EF} intersects \overleftrightarrow{AD}
- _____ 11. \overleftrightarrow{AB} intersects \overleftrightarrow{BC}
- _____ 12. \overleftrightarrow{CA} intersects \overleftrightarrow{BD}
- _____ 13. \overleftrightarrow{AC} and \overleftrightarrow{DB} are parallel
- _____ 14. \overleftrightarrow{CA} is perpendicular to \overleftrightarrow{AB}
- _____ 15. \overleftrightarrow{CD} intersects \overleftrightarrow{DB}




Did you hear the story about the peacock that lost its feathers?
To answer the riddle, write each letter on its matching numbered line or lines.


1 2 3 4 5 6 7 8 9 10
11 12 13 14 15 16 17 18 19 20
21 22 23 24 25




H




F




E



A



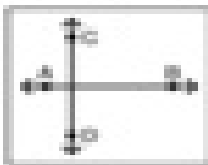
S




L



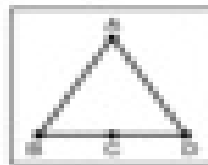
W



T



B



R

Match: Draw a diagram that shows \overleftrightarrow{CD} parallel to \overleftrightarrow{AB} and perpendicular to \overleftrightarrow{AC} .

©2005 Pearson Education, Inc.