



Date: \_\_\_\_\_ Name: \_\_\_\_\_


# What TIME Is It?




Directions: read the clock and write the time on the line.




\_\_\_\_:\_\_\_\_




\_\_\_\_:\_\_\_\_




\_\_\_\_:\_\_\_\_




\_\_\_\_:\_\_\_\_




\_\_\_\_:\_\_\_\_




\_\_\_\_:\_\_\_\_




\_\_\_\_:\_\_\_\_



\_\_\_\_:\_\_\_\_



\_\_\_\_:\_\_\_\_



\_\_\_\_:\_\_\_\_